

2705/202    2709/202  
2707/202    2710/202 ✓

**STRUCTURES II, GEOTECHNOLOGY II AND  
CONCRETE TECHNOLOGY II**

June/July 2018  
Time: 3 hours



**THE KENYA NATIONAL EXAMINATIONS COUNCIL**

**DIPLOMA IN BUILDING CONSTRUCTION  
DIPLOMA IN CIVIL ENGINEERING  
DIPLOMA IN ARCHITECTURE**

**MODULE II**

**STRUCTURES II, GEOTECHNOLOGY II AND CONCRETE TECHNOLOGY II**

**3 hours**

**INSTRUCTIONS TO CANDIDATES**

*You should have the following for this examination:*

*Answer booklet;*

*Scientific calculator.*

*This paper consists of EIGHT questions in THREE sections: A, B and C.*

*Answer at least TWO questions from sections A and B and ONE question from section C.*

*All questions carry equal marks.*

*Maximum marks for each part of a question are indicated.*

*Candidates should answer the questions in English.*

**This paper consists of 6 printed pages.**

**Candidates should check the question paper to ascertain that  
all the pages are printed as indicated and that no questions are missing.**

## SECTION A: STRUCTURES II

Answer TWO questions from this section.

1. (a) **Figure 1** shows a loaded beam. Using Macaulay's method, determine the deflection and slope under point C. (12 marks)

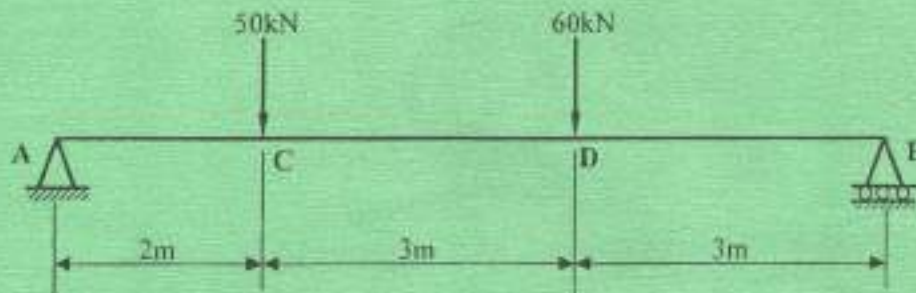


Fig. 1

- (b) **Figure 2** is a retaining wall. Determine:

- (i) tension in the joints;
- (ii) pressure at the toe and heel.

Given:

(I) unity weight of masonry wall =  $24 \text{ kN/m}^3$ ;

(II) unity weight of water =  $10 \text{ kN/m}^3$ .

(8 marks)

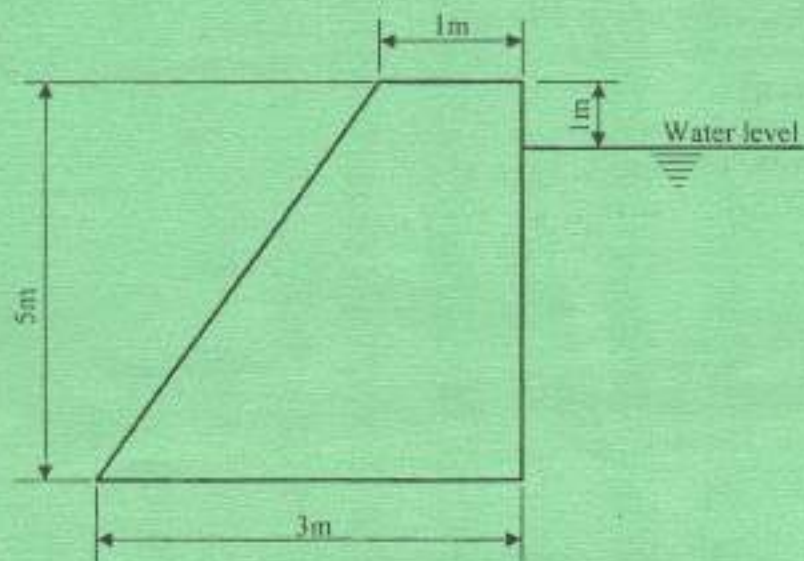


Fig. 2

2. (a) **Figure 3** shows a loaded cross-section of a column. Determine the stresses in face AB and CD, (6 marks)

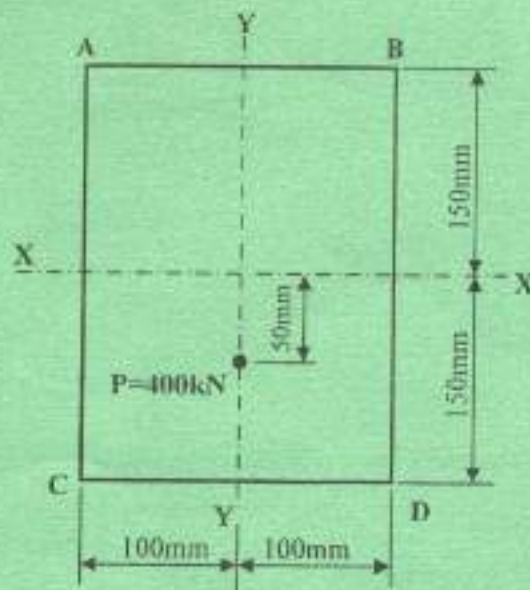


Fig. 3

- (b) (i) A rectangular beam of section 200 mm x 500 mm is reinforced with 5 No. Y 20 bars, concrete cover being 25 mm, and effective span 8 m. Determine the allowable distributed load it can carry over the entire span, given:

$$\text{Lever arm} = 0.95 d,$$

$$f_y = 460 \text{ N/mm}^2.$$

- (ii) A short braced column 300 mm x 300 mm and 7 m long is fixed at both ends and carries an axial load of 1500 kN. Design and detail the column given the following information:

Data:

$$f_{cu} = 30 \text{ N/mm}^2$$

$$f_y = 460 \text{ N/mm}^2 \text{ (for longitudinal bars)}$$

$$f_{yv} = 250 \text{ N/mm}^2 \text{ (for transverse bars).}$$

(14 marks)

3. Design a continuous one way spanning slab shown in figure 4 given the following details:

Data:

- Imposed load = 4 kN/m<sup>2</sup>
- Finishes = 0.8 kN/m<sup>2</sup>
- f<sub>cu</sub> = 35 N/mm<sup>2</sup>
- f<sub>y</sub> = 460 N/mm<sup>2</sup>
- Slab thickness = 150 mm
- Unity weight of concrete = 24 kN/m<sup>3</sup>

(20 marks)

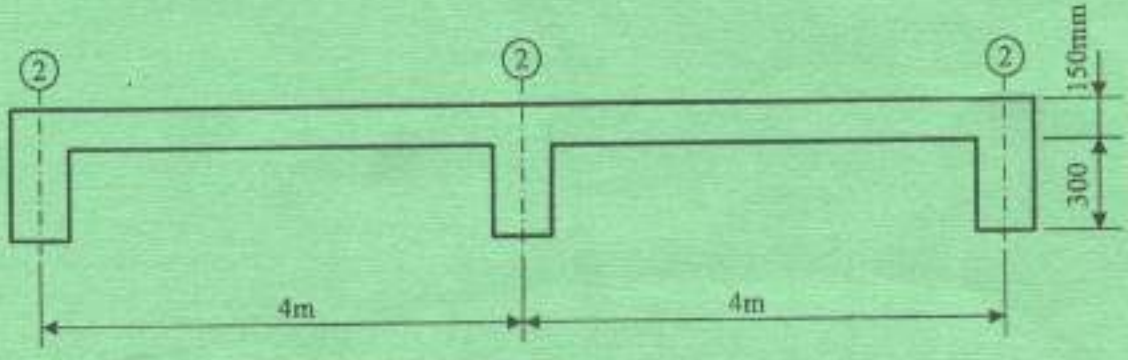


Fig. 4

(5 b)

Oxidation → The most common substance is the oxidation of iron and combination with oxygen and water to form Fe<sup>2+</sup> hydroxide and oxides. This gives the affected rocks a reddish brown coloration in the surface which crumbles easily and weakens the rock.

Hydration → This involves the rigid attachment of the OH- ions to the atoms and molecules of a mineral.  
 - when rocks minerals take up water, the increased volume creates physical stresses within the rock thus causing breaks & cracks.

Frost → When water that has entered the joints freezes, it is formed strains the walls of the joints and causes the joints to deepen and widen. When the ice thaws, water can flow into the void.  
 - Repeated freeze-thaw cycles weakens the rock with time, break up along the joints into smaller pieces.

Granular → It is a form of weathering where the grains of a rock become loosened and fall out to leave a pit-like, uneven surface.

SECTION B: GEOTECHNOLOGY II

Answer TWO questions from this section.

↑ *weir dams small dam designed to reduce flow velocity and control soil erosion*

- 4. (a) (i) Explain **three** classes of dams according to their uses. *weir dams*
- (ii) State **five** factors considered in selecting a site for a dam. (11 marks)

- (b) (i) Explain the term 'alignment' as used in tunnels.
- (ii) With the aid of sketches, describe **two** methods of tunnelling in soft ground. (9 marks)

- 5. (a) With the aid of sketches, describe how the following geological faults are formed:
  - (i) normal faults;
  - (ii) reverse faults. (8 marks)

- (b) Describe the following processes of weathering:
  - (i) granular disintegration;
  - (ii) oxidation;
  - (iii) frost action;
  - (iv) hydration. (12 marks)

*4.4 example of dam*  
*- Diversion dam is designed to divert all or a portion of the flow of water from its natural course*  
*weir dam used to keep groundwater and store oil or most of it below the surface*

- 6. (a) Describe **four** precautions taken before blasting is undertaken in a quarry. (8 marks)
- (b) Describe the following terms as used in geological maps:
  - (i) dip;
  - (ii) strike. (6 marks)
- (c) Describe **three** engineering geological map features. (6 marks)

*factor*  
*4. a. i -> Geological condition of the site*  
*-> Permeability of materials*  
*-> Earthquake zone*  
*-> Topography*  
*-> Quantity of leakage*

## SECTION C: CONCRETE TECHNOLOGY II

Answer *ONE* question from this section.

- ✓ 7. (a) State **three** advantages and **three** disadvantages of precast concrete over the insitu concrete. (6 marks)
- (b) State **four** effects caused by high temperatures in setting of concrete. (4 marks)
- (c) (i) List **three** factors to be taken into consideration when selecting the type of concrete mixer.
- (ii) With the aid of a sketch, describe the operation of reversing drum mixer. (10 marks)
8. (a) Differentiate between pre-tensioning and post-tensioning in prestressed concrete. (10 marks)
- (b) With the aid of a sketch, describe the construction procedure of an expansion joint. (10 marks)

THIS IS THE LAST PRINTED PAGE.